

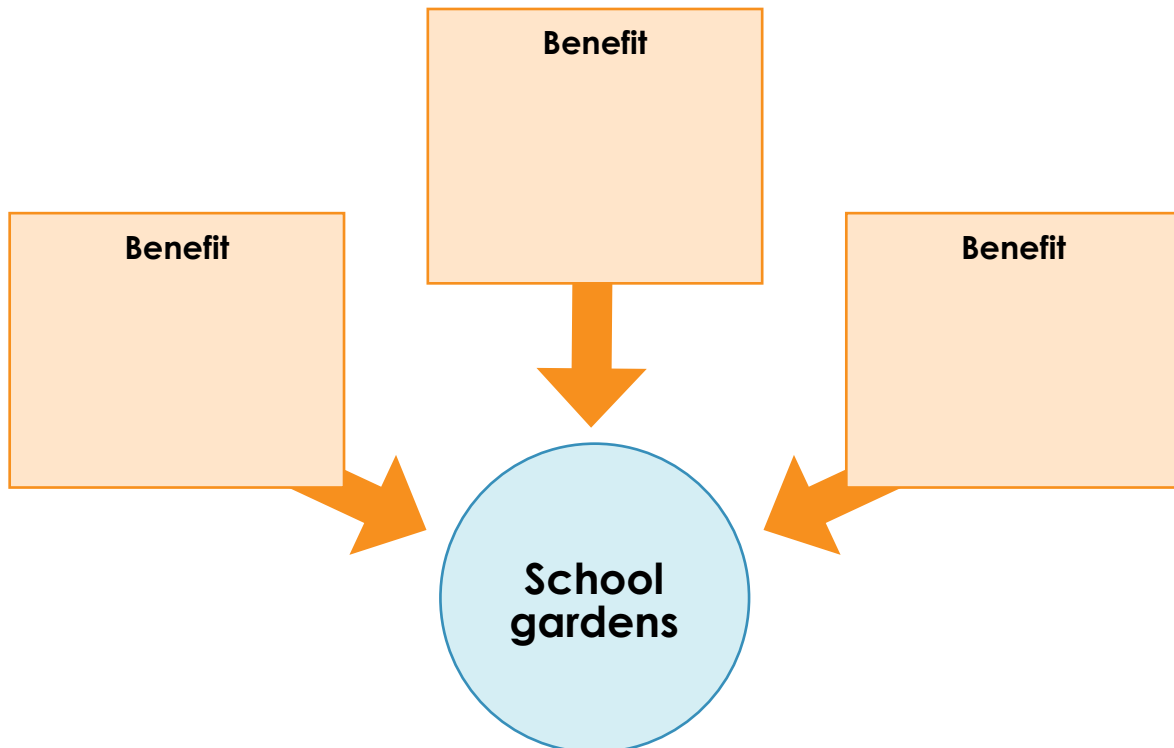
Does Everyone Have Access to Enough Food?

1. Define *food insecurity* and *malnutrition* in the following chart.

Food insecurity:	
Malnutrition:	

School and Community Gardens

2. Write down three benefits of school gardens in the following graphic.

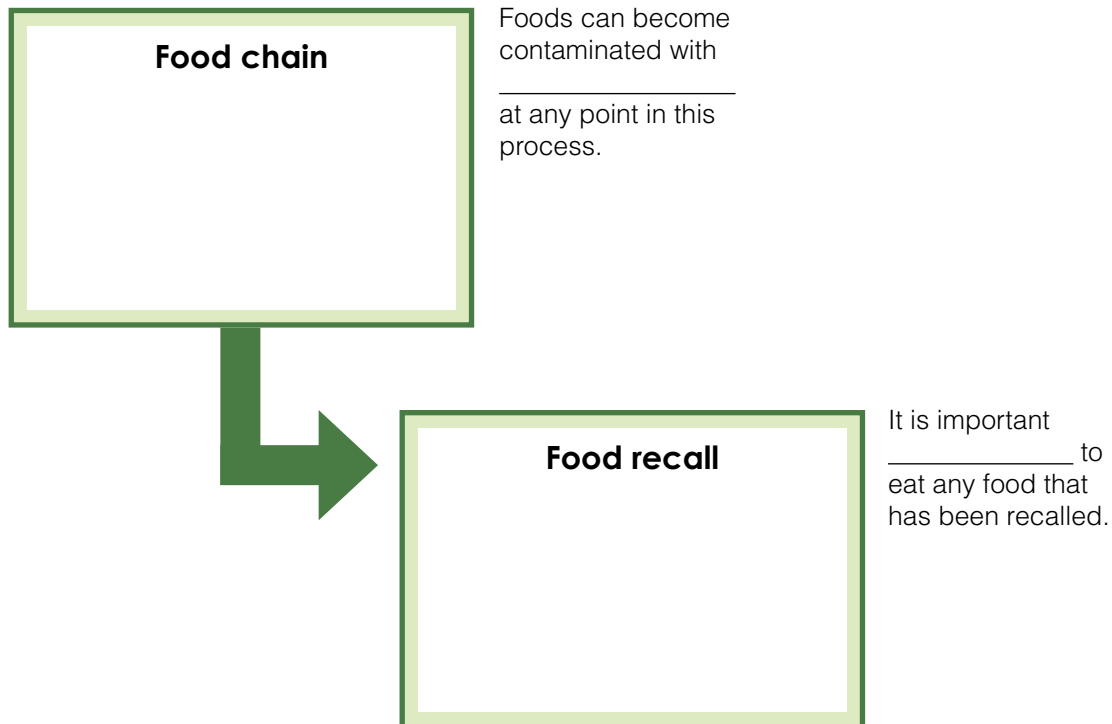


Food Safety

3. Any symptom or disorder people get from eating or drinking contaminated food is called a _____.

How Foods Get Contaminated

4. Complete the following flow chart by defining food chain and food recall. Fill in the blanks for the important reminders next to each box.



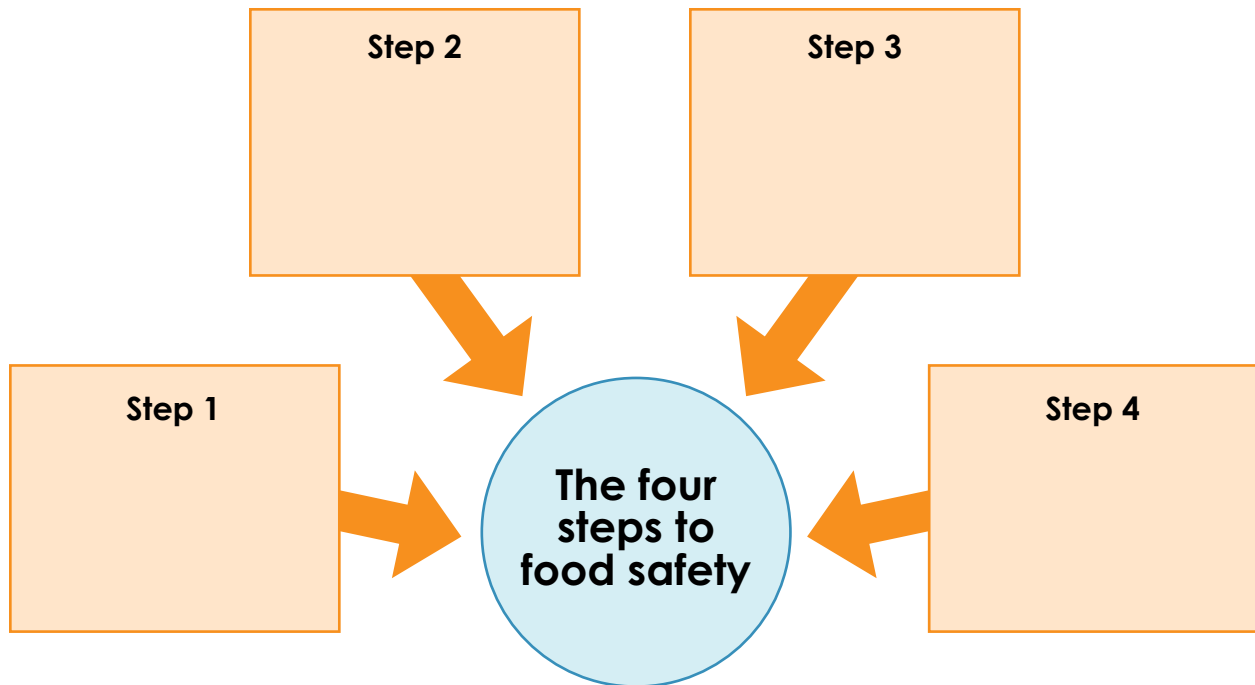
Common Foodborne Illnesses and Symptoms

5. _____ and _____ are the most common pathogens that cause foodborne illnesses.
6. List three common foodborne illnesses and their symptoms in the following table.

Foodborne illness	Symptoms
1.	
2.	
3.	

Safe Food Handling and Preparation

7. Complete the following diagram by filling in the four steps to food safety.



Food Additives and Preservatives

8. A food additive is a _____ added to food to add nutrition, or to improve freshness, taste, _____, or appearance.
9. When an additive is specifically designed to help a food last _____ without _____, it is called a _____.
10. Other preservatives include chemicals like _____, nitrites, and _____.

Pesticides

11. _____ are chemicals used in the food production process to prevent damage to a crop from _____, weeds, and _____.
12. _____ is grown or produced on an organic-certified farm.